



# MATHEMATICS

4th PRIMARY

Model Exams of  
October & November Test

طبقاً لمواصفات الورقة الامتحانية

«يصح الامتحان من ١٥ درجة

والدرجة النهائية [١٥ × ٢ = ٣٠ درجة]»

**Question 1** "Each item 2 marks"

6

Choose the correct answer from those given :

1. What is the standard form of thirteen million, six hundred five thousand ?

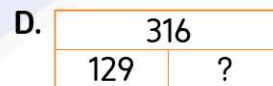


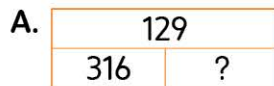
A. 30,605,000

B. 13,650,000

C. 13,605,000

D. 13,065,000

2. Mariam bought a story novel containing 316 pages , of which she read 129 pages. Which of the following bar models represents the remaining pages ?



3. 13 liters and 30 mL = \_\_\_\_\_ mL.

A. 1,330

B. 13,030

C. 43

D. 3,013

**Question 2** "Each item 1 mark"

3

Complete :

1.  $91,024 + 32,549 =$  \_\_\_\_\_

2. 3 hours = \_\_\_\_\_ minutes.

3. The greatest number formed from the digits 2 , 0 , 5 , 3 is \_\_\_\_\_

**Question 3** "Each item 1 mark"

3

**Match :**

| [A]   | [B]                |
|---|--------------------|
| 1. 18 hundreds = _____  | a. 18              |
| 2. Omar draws a picture frame in the form of a rectangle with a length of 6 cm and a width of 3 cm, then the perimeter of the frame = _____ cm. | b. 180<br>c. 1,800 |
| 3. 18 m = _____ dm.   |                    |

**Question 4** "3 marks"

3

If the population of Matrouh Governorate is 517,901 people, and the population of South Sinai Governorate is 112,211, then what is the difference between the population of Matrouh Governorate and the population of South Sinai Governorate ?

**Question 1** "Each item 2 marks"

6

Choose the correct answer from those given :

1. Which digit can be placed in the square to make the mathematical expression is correct ?

$$6,204,351 < 6,20\boxed{\phantom{0}},351$$

- |      |      |
|------|------|
| A. 2 | B. 3 |
| C. 4 | D. 5 |
2.  $613 - 247 = \text{————}$
- |        |        |
|--------|--------|
| A. 567 | B. 434 |
| C. 366 | D. 807 |
3. A rectangle, its length = 8 cm , its width = 5 cm , then its area = ————  $\text{cm}^2$
- |       |       |
|-------|-------|
| A. 40 | B. 13 |
| C. 26 | D. 64 |

**Question 2** "Each item 1 mark"

3

Complete :

1. A box has a mass of 5 kg and 700 g , then its mass in grams = ————
2. The number ———— is 10 times greater than the number one hundred thousand.
3. In the opposite bar model,
- the value of b = ————

|       |       |
|-------|-------|
| b     |       |
| 9,901 | 1,000 |

**Question 3** "Each item 1 mark"

3

Match :

| [A]  | [B]                                     |
|--|---|
| 1. The value of the digit 7 in the number 270,150,081 is _____ | a. 700,000<br>b. 70,000,000<br>c. 7,000 |
| 2. 7 km = _____ m  |   |
| 3. $342,000 + 358,000 =$ _____                                 |   |

**Question 4** "3 marks"

3

An ant works from 8:06 A.M. to 11:23 A.M.  
How long does the ant work ?



**Question 1** "Each item 2 marks"

6

**Choose the correct answer from those given :****1.** 1 day and 5 hours = \_\_\_\_\_ hours.

A. 29

B. 65

C. 15

D. 35

**2.** Which of the following is a digit ?

A. 10

B. 7

C. Three thousand

D. 5,600,218

**3.** Farid begins solving a subtraction problem.

What is his next step ?

A. Subtract 8 from 3 in the Tens place.

B. Add 3 and 8 in the Tens place.

C. Regroup the Tens place and add 8 and 13.

D. Regroup the Tens place and subtract 8 from 13.

|       |   |   |   |
|-------|---|---|---|
| 7     | 3 | 7 |   |
| -     | 4 | 8 | 4 |
| <hr/> |   |   |   |
|       |   |   | 3 |

**Question 2** "Each item 1 mark"

3

**Complete :****1.** If  $C - 2,348 = 5,053$ , then  $C =$  \_\_\_\_\_**2.** Estimate 476,651 by front-end estimation = \_\_\_\_\_**3.** 650 mm = \_\_\_\_\_ cm.

**Question 3** "Each item 1 mark"

3

Match :

| [A]  | [B]                             |
|--|---------------------------------|
| 1. Hana says that 50 hundreds is equal to _____<br>2. $1,454 - 954 =$ _____<br>3. The number $49,630 \approx$ _____ rounded to the nearest ten thousand. | a. 500<br>b. 5,000<br>c. 50,000 |

**Question 4** "3 marks"

3

A square picture with a side length of 8 cm.

Hussein wants to make a piece of glass to cover this picture , what is the area of the glass piece ?



**Question 1** "Each item 2 marks"

6

Choose the correct answer from those given :

- 423 cm = \_\_\_\_\_  
A. 23 m , 4 cm  
B. 42 m , 3 cm  
C. 3 m , 42 cm  
D. 4 m , 23 cm
- The correct strategy to find the result of  $122 - 49 =$  \_\_\_\_\_ using mental computation is \_\_\_\_\_  
A. find the result of  $122 - 50$  , then subtract 1  
B. find the result of  $122 - 50$  , then add 1  
C. find the result of  $122 - 40$  , then add 9  
D. find the result of  $122 - 49$  , then add 2
- Rounding the number 34,089 to the nearest ten thousand is \_\_\_\_\_  
A. 34,000  
B. 34,090  
C. 35,000  
D. 30,000

**Question 2** "Each item 1 mark"

3

Complete :

- A garden in the shape of a square whose side length is 10 meters , then its perimeter = \_\_\_\_\_ meters.
- If the scale in a line plot is 10 and the first point in this line is 5 , then the next point is \_\_\_\_\_
- The additive identity element is \_\_\_\_\_



**Question 3** "Each item 1 mark"

3

Match :

| [A]  | [B]       |
|--|-----------|
| 1. $22,594 + 31,766 =$ _____   | a. 5,000  |
| 2. $5 \times 10 + 4 \times 100 + 3 \times 1,000 + 6 \times 10,000 =$ _____                       | b. 63,450 |
| 3. Bassem drank 5 liters of water, then the amount he drank in milliliters is equal to _____ mL. | c. 54,360 |

**Question 4** "3 marks"

3

List the following numerals in a descending order :

900 Thousands , 9 Millions , 5 Millions and 7 Hundred Thousands , 550,223

**Question 1** "Each item 2 marks"

6

Choose the correct answer from those given :

1. Which of the following statements is correct ?

A.  $4,646 > 4,664$

B.  $4,646 < 4,466$

C.  $4,646 = 4,664$

D.  $4,646 < 4,664$

2. A rectangle of length equals 20 cm and width equals 10 cm , then its area is equal to \_\_\_\_\_  $\text{cm}^2$

A.  $2 \times 20 + 2 \times 10$

B.  $20 + 10$

C.  $20 \times 10$

D.  $[2 + 20] \times [2 + 10]$

3. Ask a group of your classmates about how many hours they spent reading yesterday. This line plot shows the students responses.



Which question could be answered using line plot ?

A. Did older students spend more time reading than younger students ?

B. How many students read all books ?

C. How many students spend 3 or more hours ?

D. How many students read 2 books yesterday ?

**Question 2** "Each item 1 mark"

3

**Complete :**

1.  $5:40 + 30 \text{ minutes} = \text{---} : \text{---}$
2. The decomposed form of the numeral 801,206 is  $\text{---}$
3. In the equation  $M + 710 = 930$ , then the value of M is equal to  $\text{---}$

**Question 3** "Each item 1 mark"

3

**Match :**

| [A]   | [B]      |
|---|----------|
| 1. $9 \text{ kg} - 1,500 \text{ g} = \text{---} \text{ g}$      | a. 75    |
| 2. $58 + 75 = \text{---} + 58$                                  | b. 750   |
| 3. The number $\text{---}$ is 10 times more than the number 75. | c. 7,500 |

**Question 4** "3 marks"

3

The country has provided a vaccination against the Corona virus. In the first stage 1,653,465 were vaccinated and 3,312,447 in the second stage. What is the total number of people vaccinated in both stages ?

# Answers

## Model 1

1. 1.C                                  2.D                                  3.B
2. 1.123,573                                  2.180                                  3.5,320
3. 1 → c                                  2 → a                                  3 → b
4. The difference =  $517,901 - 112,211 = 405,690$  people.

## Model 2

1. 1.D                                  2.C                                  3.A
2. 1.5,700 g                                  2.1,000,000                                  3.10,901
3. 1 → b                                  2 → c                                  3 → a

4.

| Hours | : | Minutes |
|-------|---|---------|
| 11    | : | 23      |
| - 8   | : | 06      |
| <hr/> |   |         |
| 3     | : | 17      |

The ant works for 3 hours and 17 minutes.

## Model 3

1. 1.A                                  2.B                                  3.D
2. 1.7,401                                  2.400,000                                  3.65
3. 1 → b                                  2 → a                                  3 → c
4. The area of the glass piece =  $8 \times 8 = 64 \text{ cm}^2$ .

---

**Model 4**


---

1. 1.D                      2.B                      3.D
2. 1.40                    2.15                    3.zero
3. 1 → c                    2 → b                    3 → a
4. The order is :  
9 Millions , 5 Millions and 7 Hundred Thousands , 900 Thousands , 550,223

---

**Model 5**


---

1. 1.D                      2.C                      3.C
2. 1.6 : 10                    2.  $800,000 + 1,000 + 200 + 6$                     3.220
3. 1 → c                    2 → a                    3 → b
4. The total number of people =  $1,653,465 + 3,312,447$   
= 4,965,912 people.

